
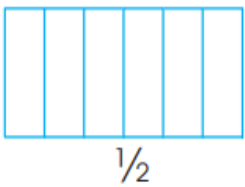
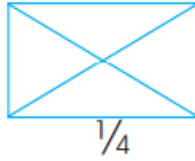
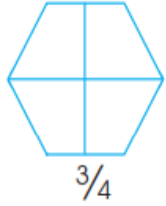
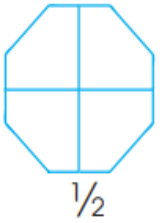


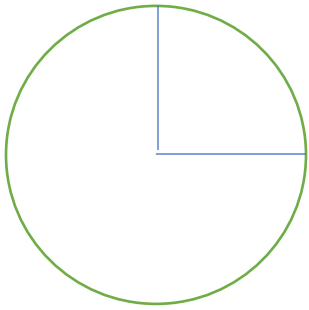
Sharya Academy

Worksheet 1-Fractions Grade IV

Q1 Color the part of the shape which is given below it.



Q2 This is a quarter of a picture. Can you complete it? How many more quarters will you draw to complete it? _____



Q3 Write one equivalent fraction for the following-

a. $\frac{2}{3} =$ _____

b. $\frac{7}{11} =$ _____

c. $\frac{9}{13} =$ _____

Q4 Write the following fractions in the simplest form-

a. $\frac{28}{100} =$ _____

b. $\frac{9}{12} =$ _____

c. $\frac{27}{30} =$ _____

d. $\frac{48}{96} =$ _____

Q5 Write each of the following as mixed fraction-

a. $\frac{19}{7} =$ _____

b. $\frac{23}{12} =$ _____

- c. $95/11 =$ _____
d. $87/12 =$ _____

Q6 Write each of the following as fraction-

- a. $6 \div 7 =$ _____
b. $7 \div 11 =$ _____
c. $19 \div 23 =$ _____
d. $37 \div 47 =$ _____
e. $98 \div 12 =$ _____

Q7 Find the result-

- a. $7/11 + 2/11 =$ _____
b. $9/14 + 3/14 =$ _____
c. $4/5 - 2/5 =$ _____
d. $7/12 - 5/12 =$ _____

Q8 Arrange in ascending and descending order-

- a. $8/9, 1/9, 6/9, 4/9$
b. $12/18, 8/18, 7/18, 17/18$